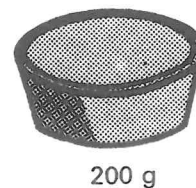

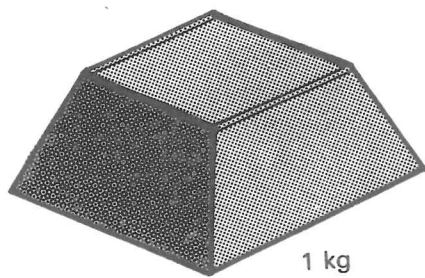


Mass



A How many:

500 g weights in 1 kg?

200 g weights in 1 kg?

100 g weights in 1 kg?

50 g weights in 1 kg?

20 g weights in 1 kg?

10 g weights in 1 kg?

B Write down the weights you would use to weigh:

320 g

250 g

350 g

600 g

650 g


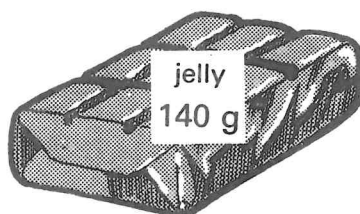
710 g

780 g

850 g

800 g

260 g



- C**
- 1 Which item weighs the most?
 - 2 Which item weighs the same as 2 jellies?
 - 3 How much heavier is the butter than the biscuits?
 - 4 What is the total weight of a jar of jam, a packet of biscuits and a jelly?
 - 5 What is the weight of 3 packets of biscuits?
- D**
- 1 Which is heavier – a packet of butter and a jelly or a packet of biscuits and a can of peas?
 - 2 How much heavier are 2 packets of butter than a jar of jam?
 - 3 How many packets of biscuits would weigh 1 kg?