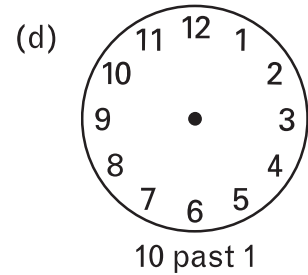
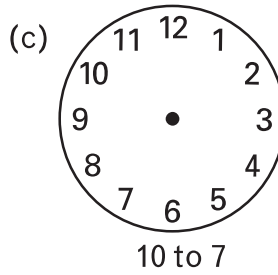
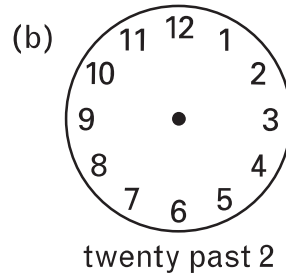
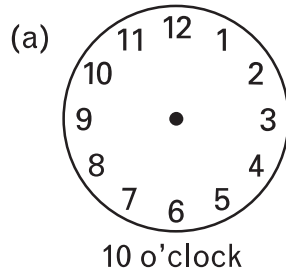
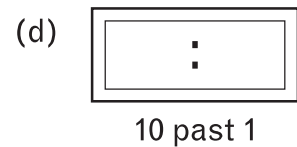
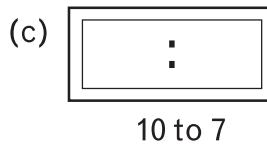
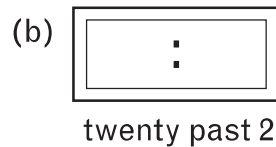
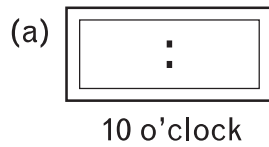



1 Draw the hands on the clocks to show the time.



2 Write the time on the digital clocks.




3 (a) Draw a shape with an area of 8 squares.



shape 1 = 8 squares

(b) Draw a different shape with an area of 8 squares.



shape 2 = 8 squares

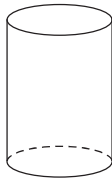
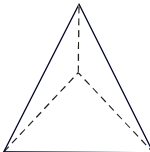
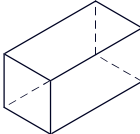
(c) In the spaces below, write the perimeter of each shape.

perimeter = _____ units

perimeter = _____ units

(d) Write a sentence telling about the two perimeters.

4 Use the words below to complete information about the 3-D shapes.

triangular pyramid	rectangular prism	cylinder
<p>(a) Name: _____ _____</p>  <p>Faces: _____ Edges: _____ Vertices: _____</p>	<p>(b) Name: _____ _____</p>  <p>Faces: _____ Edges: _____ Vertices: _____</p>	<p>(c) Name: _____ _____</p>  <p>Faces: _____ Edges: _____ Vertices: _____</p>

